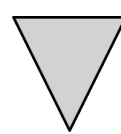
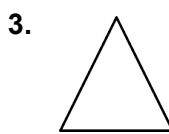




2.2

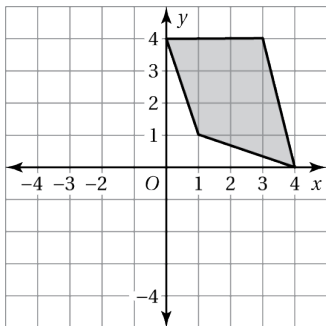
Practice

For use after Lesson 2.2

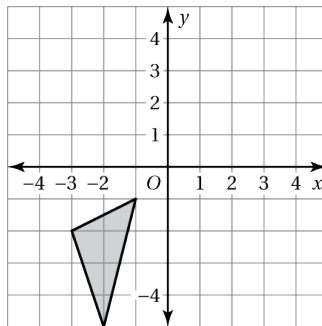
Tell whether the shaded figure is a translation of the non-shaded figure.



4. Translate the figure 4 units left and 1 unit down. What are the coordinates of the image?



5. Translate the triangle 5 units right and 4 units up. What are the coordinates of the image?



6. Describe the translation from the shaded figure to the non-shaded figure.

